

Mount Abu Public School

WINTER HOLIDAY HOME WORK

SESSION 2016-17

CLASS - V

Dear Student

Winter break is the time to relax and enjoy with your family but take care not to spend your time lazily and wastefully. To help you to use your leisure time in an organized and fruitful way, your teachers have planned some assignments related to your subjects for the revision of the concepts taught. You will surely love to complete them.

We expect you to bring the work neatly done for all subjects and submit the same by **13th January'2017**. All assignments will be given the weightage in terms of grades to be included in Evaluation III. The work will be assessed in terms of accuracy, neatness and timely submission.

Dear Parent

We would like you to help your ward to plan the day in a manner to make the most of it in a relaxed but productive manner and would like to draw your attention towards a few points your ward must adhere to:

- Begin his/her day with some physical activity.
- Have a healthy body wash and brush his/her teeth everyday.
- Eat preferably healthy homemade food and reduce the frequency of taking junk food.
- Enhance his/her readings through newspapers, magazines and good story books.
- Workout time table very wisely to complete his/her holiday homework regularly to avoid any kind of stress in the last hours.
- Identify his/her areas where they need improvement – speaking, writing, reading, math skills and handwriting etc. and work to garnish them.
- Revise all the concepts taught in the class and read the covered lessons thoroughly.

NOTE:- As part of the continuous and comprehensive evaluation- Class work, Home task, Projects and Participation in co-curricular activities and sports etc. will be assessed regularly. You may download the newsletter for the months of November & December in the first week of January.

- The reporting time for walkers and van users is 7:40 am the gates will open at 7:35 am for entry.

SCHEDULED INTER-CLASS, INTRA-CLASS & INTER-HOUSE COMPETITIONS 2016-17

DATE	NAME OF THE COMPETITION	CLASSES
13.1.17	ENGLISH SPELL CHECK,VOCAB AND CREATIVE WRITING	I-V
25.1.17	PATRIOTIC GROUP SONGS	V
27.1.17	NUMBER HANDWRITING & NUMBER DICTATION, MENTAL ABILITY AND TABLES	I-V
3.2.17	G. K ASSESSMENT (FOR DEC-JAN)	I-V
7.2.17	READER OF THE MONTH(DEC & JAN)	I-V

WISHING YOU A VERY JOYFUL AND PROSPEROUS NEW YEAR

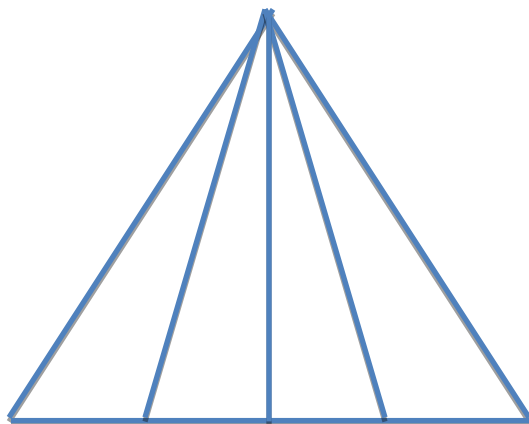
Worksheet 1

NAME;_____

Q1. Joel did yoga 13 days ago. He does yoga only on Thursday. What is the day today?

- (a) Tuesday (b) Wednesday (c) Thursday (d) Friday

Q2. How many triangles are there in this figure?



- (a) 4 (b) 7 (c) 10 (d) 12

Q3. Vandita, Usha, Sulekha and Aditya are playing cards. Vandita and Usha are partners. If Usha is facing east, and Sulekha is sitting on left hand side of Usha. Aditya is facing which direction?

- (a) North (b) East (c) West (d) South

Q4. Which of the following 2 statements is true?

Statement 1 : All rectangles are squares.

Statement 2 : All squares are rectangles.

- (a) Only statement 1
(b) Only statement 2
(c) Statements 1 and 2
(d) None of these

Q5. What is the next term in this series?

$$\frac{1}{4}, \frac{1}{7}, \frac{1}{11}, \frac{1}{16}, \frac{1}{22}, \frac{1}{29}, \dots$$

- (a) $\frac{1}{35}$ (b) $\frac{1}{36}$ (c) $\frac{1}{37}$ (d) $\frac{1}{38}$

Q6. If $D > B$, $B > C$ and $C > A$, then which of the following is definitely wrong?

- (a) $A > D$ (b) $D > A$ (c) $B > A$ (d) $D > C$

Q7. Find the next number in the sequence.

3, 4, 5, 6, 11, 12, 13, 14, 19, 20, 21, 22, 27, 28, 29, 30, _____

- (a) 31 (b) 34 (c) 35 (d) 36

Q8. Round each number to nearest tens and find the product.

$$93 \times 77 \times 67$$

- (a) 560000 (b) 150000 (c) 490000 (d) 504000

Q9. Madhav rolls a cube, which has following letters on each face:

J Y R C U D

What fraction of letters on the cube are symmetric (either horizontal or vertical)?

- (a) $\frac{1}{6}$ (b) $\frac{1}{2}$ (c) $\frac{2}{3}$ (d) $\frac{1}{3}$

Q10. When a number is put into a machine, a different number comes out. If 4 goes in, 16 comes out. If 5 goes in, 20 comes out. If 6 goes in, 24 comes out. If 8 goes in, what number should come out?

- (a) 16 (b) 24 (c) 32 (d) 40

Q11. Here are some words translated from an artificial language.

plekapaki means fruitcake
pakishillen means cakewalk
treftalan means buttercup

Which word could mean "cupcake"?

- (a) shillenan (b) treftpleka (c) pakitreft (d) alanpaki

Q12. Roshan is taller than Hardik who is shorter than Sushil. Niza is taller than Harry but shorter than Hardik. Sushil is shorter than Roshan. Who is the tallest?

- (a) Roshan (b) Niza (c) Sushil (d) Harry

Q13. Find the odd one out:

- (a) 6 : 23 (b) 3 : 11 (c) 1 : 3 (d) 5 : 18

Q14. If in a row ved is 11th from starting and 14th from the last. How many students are there in a row.

- (a) 22 (b) 23 (c) 24 (d) 25

Q15. In a family there are 4 girls children. Each one of them has one brother, how many children there in family ?

- (a) 4 (b) 5 (c) 6 (d) 8

Worksheet-2

Q1: Give one example of each.

- a) Proper fraction _____
- b) Mixed fraction _____
- c) Improper fraction _____
- d) Equivalent fraction _____

Q2: Compare the following.

- a) $\frac{1}{7}$ _____ $\frac{1}{9}$
- b) $\frac{1}{13}$ _____ $\frac{1}{8}$
- c) 0.73 _____ 0.78
- d) 6.42 _____ 7.92

Q3: Convert in lowest form.

- a) $\frac{20}{32}$ _____
- b) $\frac{6}{33}$ _____

Q4: Solve:

- a) $\frac{1}{4} + \frac{1}{8} + \frac{1}{12}$ _____

- b) $\frac{1}{9} - \frac{1}{18}$ _____

- c) $\frac{11}{4} \times 7$ _____

- d) 10 paiseis _____ of one rupee.
- e) 30 seconds is _____ of a minute.

Q5: Convert these fractions into decimals.

- a) $\frac{3}{10}$ _____
- b) $\frac{2}{100}$ _____
- c) $\frac{4}{1000}$ _____

Q6: Convert these decimals into fractions.

a) 5.23 _____

b) 0.6 _____

c) 0.72 _____

Q7: Arrange in ascending order.

a) 2.34 , 7.32 , 6.11 , 5.92

b) $\frac{3}{10}$, $\frac{5}{10}$, $\frac{2}{20}$, $\frac{4}{10}$

Q8: Write in decimal form.

a) One hundred ten thousandths _____

b) Eight thousandths _____

Q9: Write in expanded form

a) 29.67 _____

b) 74.003 _____

Q10: Write in short form

a) 29.67 _____

b) $90 + 2 + 0.5 + 0.006$ _____

Subject -English
Worksheet 1

Name: _____

Q 1 Complete the statements with correct form of verb

1. The policeman _____ the thief red-handed.(caught)
2. Workers _____ from their work in protest. (stay away)
3. The whole day yesterday the boys _____ to the cricket commentary.(listen)
4. A bomb scare _____ a delay of the flight.(cause)
5. Last year they _____ a high wall around the house.(build)
6. I _____ a number of detective novels when I was a child.(read)
7. After Meena _____ into the bus we discovered that we _____ the wrong one.(get , boarded)
8. I _____ the assignment before the bell _____ (finish , ring)
9. John _____ to join the medical college, but he _____ to get admission.(want , fail)
- 10) He usually _____ his bus.(miss)

Q 2 Change the given sentences as directed

- 1) He goes to play out in the evening.(Negative)

- 2) I learnt French in Class V .(Interrogative)

- 3) I complete my work in time.(Interrogative Negative)

- 4) Neena and her friends are watching a movie.(Interrogative)

- 5) My dog ran for the bone.(Negative)

Q3 Find and correct the mistakes related to question tags in each sentence.

1. You're Australian, aren't they? _____
2. You aren't English, aren't you? _____
3. Mary smokes, didn't she? _____
4. Sharks don't like vegetables, don't they? _____
5. Moles can't see, can it? _____

Q 4 Fill in the blanks with suitable adverbs from the box. Write the kind of adverb against each sentence. The same adverb can be used more than once

Occasionally	Sometimes	Usually	Rarely	Once
Very	Never	Mostly	Often	always

1. I _____ go to bed at 10 o'clock. (.....)
2. I have _____ been to the USA. (.....)
3. I have been to Australia just _____ (.....)
4. I _____ take a bath before I go to bed. (.....)
5. My grandparents live in Kerala. I visit them _____ (.....)
6. My friends are _____ non-smokers. (.....)
7. I was _____ impressed with her performance. (.....)

Q 5 You were asking for a bicycle from your father since long. Without your knowledge he bought you a new bicycle. You loved the surprise. Write your feelings in your diary.

WORKSHEET 2

Name: _____

Q1 Unscramble the given words:

YLCEC (a road transport)

WESATER (keeps one warm in winters)

TEEHRWA (climate)

IIREONCTAT (You do this with a poem)

HGIHET (is used to measure how big is the athe thing)

ORPALUP (synonym of famous)

Q2 Be a story writer and fill in the blanks with the right parts of speech to complete this outrageous story!

_____ and _____ went on a / an _____ camping trip. They _____ their _____ and started _____ to build a _____. They knew they needed to _____ a lot of _____ before it became too _____ so they _____ very _____. For a snack they decided to make _____ and cook up a can of _____. As it got dark outside, _____ heard a _____ make a sound in the woods! _____ was scared . Outside, _____ a _____ from inside the tent. The _____ but not before _____ over all the _____! When the morning came, _____ and _____ left to go _____ up a _____ and gather _____. It truly was a _____ camping trip!

Give a suitable title to the story .

Q3 Write a synonym and an antonym for each word. Use the help box

dry	different	false	famished	healthy	difficult
sob	poor	moist	Factual	similar	Laugh
easy		rich			

Word	Synonyms	Antonym
TRUE	_____	_____
DAMP	_____	_____
CRY	_____	_____
ALIKE	_____	_____
HARD	_____	_____
WEALTHY	_____	_____
HUNGRY	_____	_____

Q4 Choose the correct homophone

- 1) I couldn't _____ the pain.(bear / bare)
- 2) The _____ shop didn't sell red pens.(stationery/ stationary)
- 3) The _____ after the dinner was too sweet.(dessert/ desert)
- 4) The baby _____ at his mother.(stare/stair)
- 5) The _____ of the train was reserved by my uncle.(birth/ berth)

Q5 Choose the correct spelling

- 1) skilful / skilfull
- 2) approached / approached
- 3) creative / creative
- 4) caling / calling
- 5) receive / receve
- 6) programme / program

Subject -Social Science

Worksheet 1

NAME_____

SEC_____

ROLL NO_____

QUES. Mark the right answer of MCQ

1] Which road connects India and Peshwar?

A] Sher Shah Suri Marg

b] Ring Road

c] Grand Trunk Road

2] Which two cities are connected by The Trans- Siberian railways?

A] Moscow- Venezuala
Vladivostok

b] Moscow-Paris

c] Moscow-

3] Which is the world's largest passenger aeroplane?

A] The British airlines

b] The Jet airways

c] The Airbus-A380

4] Who were the first to make aeroplane?

A] B. Diaz

b] James Watt

c] Wright Brothers

5] To deliver urgent posts the post office offers the facility of _____

A] Mail post

b] Letter post

c] Speed Post

6] Who invented telephone ?

A] Alexander Graham Bell

b] Marconi

c] Baird

7] We can transfer very large files to another person through the _____.

A] Internet

b] Mail

Post

c] Courier

8] Which means of communication sends the direct signals to the earth for live telecast of a programme?

A] Satellite

b] Moon

C] None of these

9] Which amongst these is the medium of Mass communication ?

A] Newspaper

b] Telephone

c] Letter

10] Which is the social networking site?

A] Whats App

b] E-mail

C] Desktop

WORKSHEET 2

Q1. Assume yourself to be Anne Frank –a Jewish girl who was hiding with her family but was found out and sent to concentration camp during first world war about the conditions of these camps and how you were treated there? Explain.

Answer: _____

Q2. Discuss how it happened?
First world war was fought.

Europe suffered with the period of Great Depression in 1929.

Q3. Match the following :

Archduke Franz assassinated	1929
Adolf Hitler appointed as chancellor	1941
Japan attacked Pearl Harbour	1919
The treaty of Versailles signed	1914
The Great Depression	1933

Q4 Name them:

I am the dictator of Italy –

An organization formed after the second world war-

I am the leader of Nazi party-

The German submarines-

A diary written by Anne Frank-

Subject - Science
Worksheet 1

Name : _____

Date: _____

Q1. Tick the right option:

1. Which of the following helps to loosen the soil?
a) Manuring b) Ploughing c) Harvesting
2. On cooling, the movement of molecules of a substance _____
a) increases b) decreases c) remains the same
3. Removal of topsoil by wind or water is called _____
a) soil conservation b) soil profile c) soil erosion
4. The number of bones in an adult human body is _____
a) 202 b) 206 c) 209
5. The spinal cord is protected by _____
a) backbone b) ribcage c) skull
6. Which of the following forms a layer of sediment in water?
a) sand b) sugar c) salt
7. When the moon is not visible to us, it is called _____
a) crescent moon b) new moon c) full moon
8. Volcanic eruption under the sea is called _____
a) Tsunami b) epicenter c) Richter scale
9. Which of the following is an immiscible liquid?
a) kerosene b) lemon juice c) milk
10. Solar energy is released when _____ changes into helium.
a) oxygen b) hydrogen c) carbondioxide

Q2. Write one word for the following.

1. This part of the seed contains food for the baby plant. _____
2. An injection given by doctors to treat snake bite. _____
3. The uppermost layer of soil. _____
4. The most abundant gas in the atmosphere. _____
5. The hollow top of a volcano which is shaped like a bowl. _____

Q3. Write two examples of each of the following.

1. Communicable diseases _____, _____
2. Natural agents of soil erosion _____, _____
3. Two physical changes _____, _____
4. Methods of soil conservation _____, _____
5. Kharif crops _____, _____

Q4. Think and answer.

- (i) When your mother cooks food, you can smell the food across the house. Why?

- (ii) What happens to the molecules of water when heated?

- (iii) What happens as we go higher up in the atmosphere?


- (iv) Why does the moon have so many craters?

- (v) Sahil lives in Nainital. He does farming there. Which method should he use to do farming there?

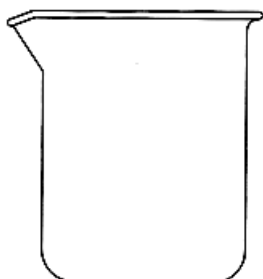
Q5. Science Quiz:

1. Name the particles that form matter. _____
2. The roots of trees reach this layer of soil _____
3. Which part of the brain is called the centre of intelligence. _____
4. Crops grown between two harvesting seasons. _____
5. The gas present in aerated drinks . _____
6. Breaking down of rocks into smaller pieces _____
7. The tiniest particle of matter _____


Q6 Draw the molecules in the empty containers.



Solid



Liquid



Gas

Worksheet 2

Name : _____

Date: _____

Q1. Tick the right option:

- Cereals , fruits , potato and honey are sources of _____
a) carbohydrates b) fats c) minerals
- The molecules of a matter are loosely packed. The state of matter is
a) solid b) liquid c) Gas
- A large amount of humus is present in _____
a) subsoil b) bedrock c) topsoil
- Which of the following is not a method of soil conservation?
a) weathering b) step farming c) Afforestation
- The surroundings in which an animal lives naturally is called
a) home b) habitat c) adaptation
- The gas necessary for burning is _____
a) oxygen b) carbon dioxide c) nitrogen
- Drinking water can be purified by _____
a) evaporation b) boiling c) distillation
- Terrace farming is usually done in _____ regions.
a) coastal b) plains c) hilly mountainous
- Which part of the brain controls the function of involuntary muscles in our body?
a) cerebrum b) cerebellum c) medulla
- All weather changes take place in _____
a) Exosphere b) stratosphere c) Troposphere

Q2. Write one word for the following

- An immediate help given to an injured person. _____
- A special device used to put out small fires. _____
- The changing of a liquid into solid. _____
- This gas is dissolved in soft drinks to make it fizzy. _____
- An effective way of preventing communicable diseases. _____

Q3. Write two examples of each for each of the following.

- Soluble impurities _____ , _____
- Types of volcanoes _____ , _____
- Immiscible liquids _____ , _____
- Gases which dissolve in water _____ , _____
- Two matter that can flow _____ , _____

Q4. Think and answer.

- (i) Why is carbon dioxide dissolved in water good for aquatic plants?

- (ii) Why do solids have fixed shape and volume?

- (iii) Name the process in the following transformations:

Solid → Liquid _____

Liquid → Vapour _____

Liquid → Solid _____

Vapour → Liquid _____

- (iv) Why is soil important for all living things?

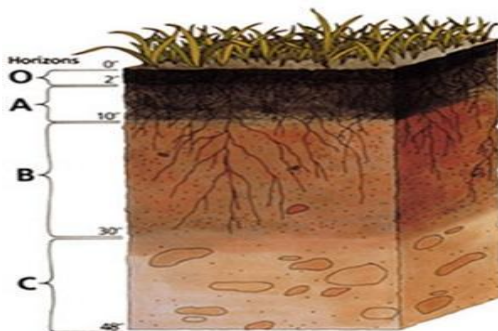
- (v) What is the safest way of purifying water at home without using water filters?

Q5. Science Quiz:

1. Name two matter that can flow. _____
2. The longest bone of our body. _____
3. Planting trees in large scale. _____
4. Supplying water to the crops for their appropriate growth

5. It is the basic unit of nervous system. _____
6. The property of air used in syringes _____
7. Outermost layer of atmosphere. _____

Q6. Identify and label the given diagram.



कक्षा - पाँचवी

रचनात्मक लेखन

- * परिश्रम का महत्व बताते हुए कोई चार सूक्तियाँ (स्लोगन) लिखो।

उदाहरण

करत-करत अभ्यास कै जड़मति होत सुजान !

- * खेलों का हमारे जीवन में क्या महत्व है। अपने विचार व्यक्त करो।

वर्तनी

* निम्न वाक्य शुद्ध करके पुनः लिखो ।

- घर में मैना बैठी है ।

- मेरे को जयपुर जाना है ।

- बच्चों को कार्टर सेब खिलाओ ।

- उसने गाड़ी बेच दिया ।

* शुद्ध शब्द पर ✓ का निशान लगाओ

उज्ज्वल ☐

उज्ज्वल ☐

पड़ोसी ☐

पड़ोसी ☐

आशीर्वाद ☐

आशीर्वाद ☐

क्योंकि ☐

क्योंकी ☐

इसलिए ☐

इसीलिए ☐

* निम्न संवाद शुद्ध करो .

नीना - तुम्हारे को पुस्तक क्यों चाहिए ?

रोहन - मेरे को पुस्तक में से कोई टूटना है ।

व्याकरण

* अर्थ समझकर मुहावरा लिखो

१. लालचाना _____
२. बहुत प्रसन्न होना _____
३. बहुत परेशान करना _____
४. शाबाशी देना _____
५. डरकर भागना _____

* विराम- चिह्नों के बारे में लिखो

। - मैं पूर्ण- विराम हूँ। मुझे वाक्य समाप्त होने पर लगाते हैं।

?

!

७

* जातिवाचक तथा व्यक्ति वाचक संज्ञा द्वारा वाक्य पूरा करो.

- हमारा राष्ट्रीय _____ कमल है।
- मेरा _____ मुझे बहुत प्यार करता है।
- _____ अंतरिक्ष का चमकता सितारा थीं।
- _____ हमारे देश के प्रथम प्रधानमंत्री थे।
- _____ से अनेक नदियाँ निकलती हैं।

* पहली पढ़कर सही पर्यायवाची लिखो।

- रात में नभ पर आता हूँ _____
मैं शीतलता फैलाता हूँ।
- कीचड़ में मैं खिलता हूँ _____
सबसे सुंदर दिखता हूँ।
- सच्चा साथी कहलाऊँ _____
तुमको कितना ज्ञान दिलाऊँ।

शब्द भंडार तथा शब्दकोश

* निर्देशानुसार करो

पढ़ना पढ़ा पढ़ेगा
 _____ सोसगा

खाना _____

बैचना _____

* सही स्थान पर लिखो

(पैड़-पौधों, क्यारी, फसल, माता-पिता)
 पुस्तक, दरवाज़ा

युग्म शब्द _____

न्युक्ता शब्द _____

संयुक्ताक्षर _____

* एकवचन को बहुवचन में बदलो

मैं _____ तू _____

यह _____ वह _____

* समानार्थी शब्द ढूँढ़कर लिखो

ख	र	भ	न	प
वि	ह	म	वा	ता
पि	य	वा	टि	का
न	य	न	ल	क

ईश्वर _____

द्वज _____

उपवन _____

जगत _____

नेत्र _____

पक्षी _____

SCHEDULE OF SPECIFIED CLASS TEST TO BE ASSESSED FOR EVALUATION -3
CLASSES I – V
SESSION: 2016-17

DATE & CLASS	I	II	III	IV	V
18/1/17 (WED)	ENGLISH	EVS	EVS	ENGLISH	MATHS
20/1/17 (FRI)		ENGLISH	HINDI		
25/1/17 (WED)	HINDI	HINDI	ENGLISH	HINDI	ENGLISH
1/2/17 (WED)	MATHS	MATHS	MATHS	MATHS	HINDI
8/2/17 (WED)	-	-	-	SCIENCE	SOCIAL SCIENCE
10/2/17 (FRI)	EVS	-	MATHS	-	FRENCH/SANSKRIT
17/2/17 (FRI)	EVS		EVS	SOCIAL SCIENCE	SCIENCE
20TH – 24TH FEB'17 AS PER THEIR COMPUTER PERIOD IN THE TIME TABLE FOR CLASSES I - V					