

# Practice worksheet


SUB: N. S. O

Date \_\_\_\_\_

class: II

Name \_\_\_\_\_

Q1. Which of the given animals products can be obtained from a silkworm?



Q2. Which is the largest mammal does not have

(a) eyes

(b) legs

(c) fins

(d) teeth

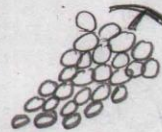
Q3. Which of your sense organs would not help you to find any difference between these two given objects.

(a) skin

(b) eyes

(c) ears

(d) tongue



Q4. We get oil from the seeds of

(a) soyabean (b) groundnut (c) mustard

(d) All of these

Q5. Which part of the cotton plant yield cotton bolls?

(a) leaf

(b) fruit

(c) seed

(d) flower

Q6. The given symbol is meant for

(a) Bus stop

(b) hospital

(c) postoffice (d) press



Q7. Which of the following products do we use to keep our house free from germs?

(a) Lux

(b) Surf excel

(c) Dettol

(d) Sun silk

Q8. A piece of land surrounded by water on all the sides is called.

(a) island

(b) delta

(c) plateau

(d) valley

Q9. Which sense is used to tell if there is sugar in a glass of tea?

- (a) touch (b) hearing (c) taste (d) smell

Q10. Ice cubes are an example of which form of water?

- (a) gas (b) liquid (c) solid (d) water vapour

Q11. Which part of the given vegetable do we eat?

- (a) stem (b) flower (c) fruit (d) leaves



Q12. The items in the given figure are made from



(a) skin of dead animals



(b) tail of dead horse



(c) wool of dead sheep

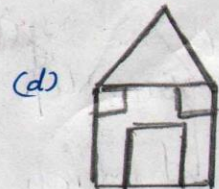



(d) flesh of dead animals

Q13. A long broom is used for

- (a) sweeping (b) mopping (c) dusting (d) cleaning

Q14. Which of the following figure has the most number of curves?



Q15. Earth is called a blue planet because

- (a) It is made of land and water  
(b) Its three-fourth part is covered with water  
(c) The earth has more land than water.