

MATHS PRACTICE WORKSHEET
TOPIC – MEASUREMENT (LENGTH, WEIGHT, AND CAPACITY)
CLASS – II SECTION - ____

Name: _____

Date: _____

Q1. Tick the correct answer:

- To measure the length of a curtain, we will use _____.
a. Meters b. Centimeters c. Kilometers
- There are _____ cms in 3m.
a. 30 b. 3000 c. 300
- Weight of objects is measured in _____.
a. Kilograms b. Litres c. Meter
- Hand span and cubit unit are the non standard units to measure _____.
a. Capacity b. Length c. Weight



Q2. Put the suitable unit of measurement for:




- Water: _____
- Watermelon: _____
- Rope: _____

Q3. Name and draw any one object which is sold by measuring:


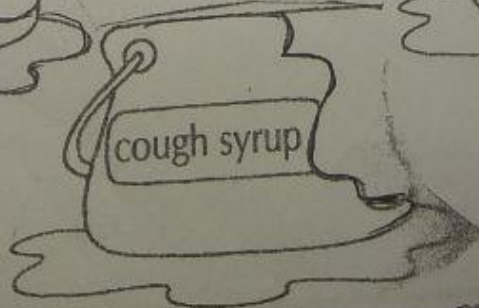
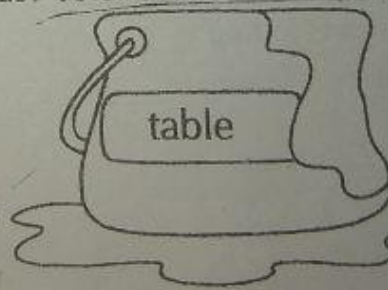

a. Length

b. Weight

c. Capacity



Q4. Which of the following do you think are liquids? Color them.

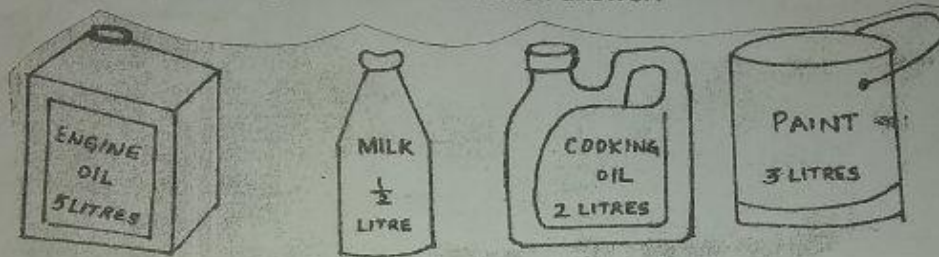


Q5. Fill in the table:

S.NO	WEIGHT	WEIGHTS TO BE ADDED TO MAKE 1KG
1.	700 gm	
2.	500 gm	
3.	800 gm	

S.NO	LENGTH	LENGTH TO BE ADDED TO MAKE 1M
1.	90 cm	
2.	25 cm	
3.	55 cm	


Q6. Look at the pictures given below and then answer:



- How many liters of engine oil can a tin hold? _____
- Which one of them holds the least amount of liquid? _____
- How much cooking oil is there in two such tins of cooking oil? _____
- What is the difference between the capacities of Oil tin and Milk bottle? _____

Q7. Check the statements and put a (✓) or (X) in front of them:

- Rohan bought 3 liters of apples. _____
- Anu bought 5 kg of oranges. _____
- Ajay sold 7 liters of books. _____
- Tina purchased 15 liters of cloth. _____
- Jai gave 4 kg of sweets to Anu. _____
- Shelly bought 2 liters of water. _____



Q8. Give the correct unit / number:

- _____ cm = 1m.
- 1000 ml = 1 _____
- Half liter = _____ ml.
- 1 kg = _____ g